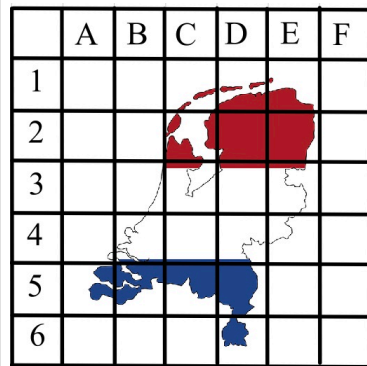
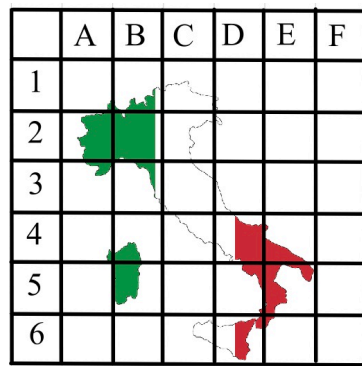


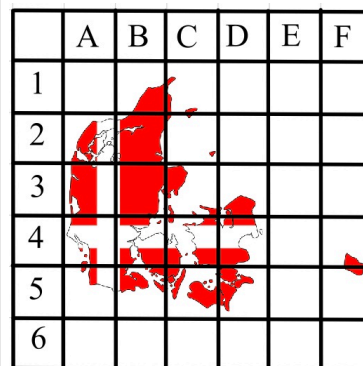
**GeoGrid Quiz:** Identify the Country from the outline and flag colours, name the capital and suggest the grid reference for the capital location



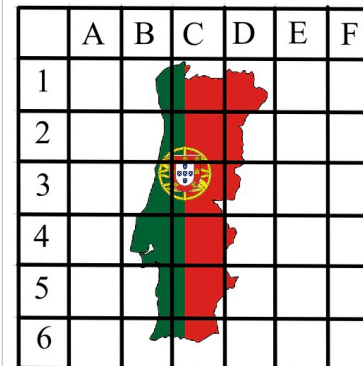
Country  
**The Netherlands**  
 Capital City  
**Amsterdam**  
 Capital Grid Ref: **3C**



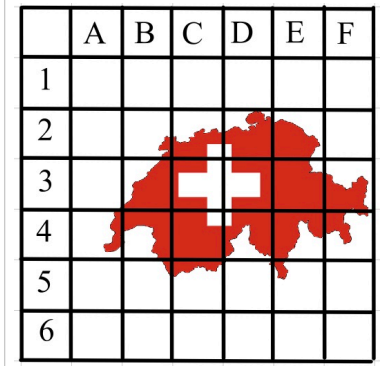
Country  
**Italy**  
 Capital City  
**Rome**  
 Capital Grid Ref: **4C**



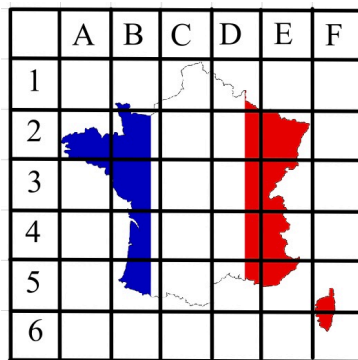
Country  
**Denmark**  
 Capital City  
**Copenhagen**  
 Capital Grid Ref: **4D**



Country  
**Portugal**  
 Capital City  
**Lisbon**  
 Capital Grid Ref: **4B**




Country  
**Switzerland**  
 Capital City  
**Bern**  
 Capital Grid Ref: **3C**



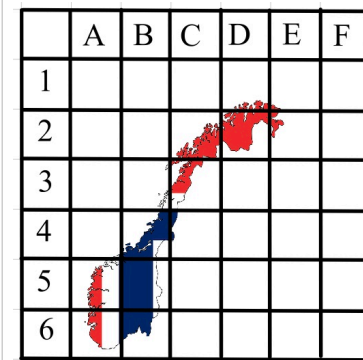
Country  
**France**  
 Capital City  
**Paris**  
 Capital Grid Ref: **2C**



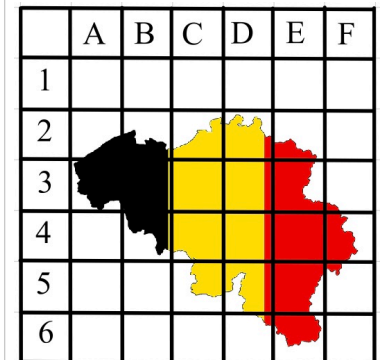
Country  
**Spain**  
 Capital City  
**Madrid**  
 Capital Grid Ref: **3C**



Country  
**Iceland**  
 Capital City  
**Reykjavik**  
 Capital Grid Ref: **4B**



Country  
**Norway**  
 Capital City  
**Oslo**  
 Capital Grid Ref: **6B**



Country  
**Belgium**  
 Capital City  
**Brussels**  
 Capital Grid Ref: **3C**